


## Telling the Time to the Minute

## Telling the Time to the Minute

4a. Match the clocks to the correct statement.



A



B



C

1. Thirteen minutes past six.


2. Thirteen minutes to seven.

3. Seven minutes past six.




3 PS


4b. Match the clocks to the correct statement.



A



B



C

1. Nine minutes past twelve.


2. Twelve minutes past three.

3. Twelve minutes to nine.



3 PS

5a. The time is twenty-one minutes past five. Which arrow is the correct minute hand?




Explain why.



3 R

5b. The time is twenty-four minutes to ten. Which arrow is the correct minute hand?

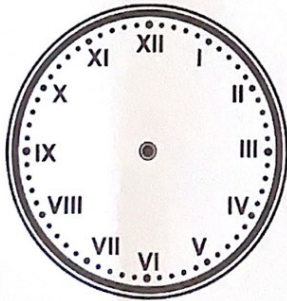


Explain why.



3 R

6a. It takes Carla 23 minutes to drive to work. She needs to arrive at work for half past 8. What time does she need to set off?




Draw the time she needs to leave the house on the clock face.



3 PS

6b. Sam leaves the house at quarter past 4, it takes him 22 minutes to walk to football training. What time does he arrive at training?



Draw the time he arrives at training on the clock face.



3 PS