


Telling the Time to the Minute


Telling the Time to the Minute

5a. What time is shown on the clock?




3 VF

5b. What time is shown on the clock?



3 VF

6a. Tick the correct time shown on the clock.



Twenty-one minutes past 6


Twenty-eight minutes to 4

Twenty-one minutes past 7



3 VF

6b. Tick the correct time shown on the clock.



Nineteen minutes to 2


Eleven minutes past eight.

Forty minutes past 2




3 VF

7a. Draw hands on the clock so that it reads four minutes past eight.



3 VF

7b. Draw hands on the clock so that it reads thirteen minutes to five.



3 VF

8a. True or false?

At twenty-three minutes to eleven, the minute hand is pointing between the seven and the eight.



3 VF

8b. True or false?

At seventeen minutes past ten, the minute hand is pointing between the four and the five.



3 VF