

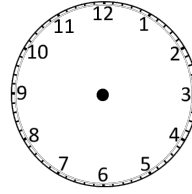
Finding the end time or the start time

1. The kids cookery Show lasts for 15 minutes.

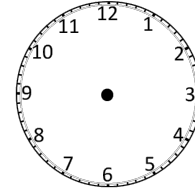
It starts at twenty-five minutes to 8.

What time does it finish?

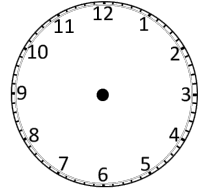
The cookery show finishes at...



start time



time taken

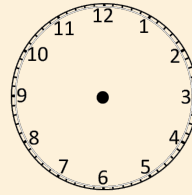


end time

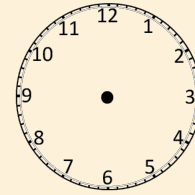
2. A cartoon ends at twenty-five minutes to 9.

It was 20 minutes long.

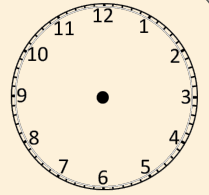
What time did the cartoon start?



start time



time taken



end time

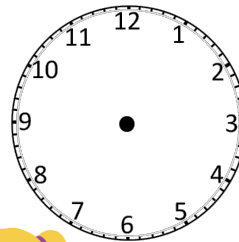
3. Molly leaves for school at ten minutes past 8.

It takes her 40 minutes.

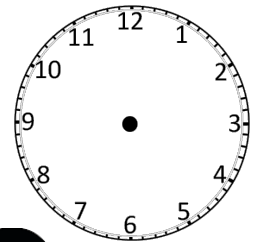
Kasim leaves for school at twenty-five minutes to 9.

It takes him 10 minutes.

Draw the 2 times they arrive in school.



Molly



Kasim

Who arrives the earliest? _____

3. A cake takes 35 minutes to bake.

The cake finishes baking some time between quarter to 4 and 4 o'clock.

What time could the cake have started baking?

I wonder if I can think of more than one answer.

