







Telling the time to 5 minutes.




- 3 a) Circle the bus that leaves at ten past 12.



- b) Circle the bus that leaves at ten to 12.



- c) What time does bus C leave?



- 4 The time is ten minutes to 8.

Which number will the minute hand point to?

How do you know?



Year 3 went to the theatre. The show started at 20 past 1.



- a) Which of the clock faces show the latest time that year 3 could have sat in their seats, without missing any of the show. Explain fully.
- b) If year 3 sat in their seats at the time shown on the first clock, would they have been early or late? Explain your answer.